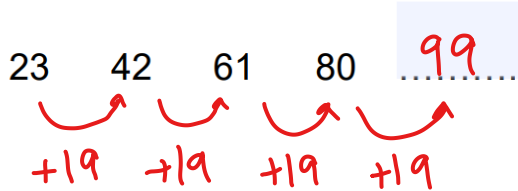


Non-calculator Questions

City & Guilds

1.

What is the next number in this sequence?



1 mark

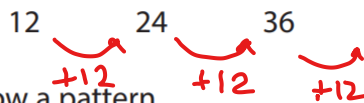
Calculator Questions

Edexcel

1.

Bret buys packs of card.

These are the numbers of sheets of card in different packs.



The numbers of sheets follow a pattern.

Bret wants to buy the pack with the next largest number of sheets.

What is the number of sheets in the pack Bret buys?

(1)

Show your answer here.

$$36 + 12 = 48$$

NCFE

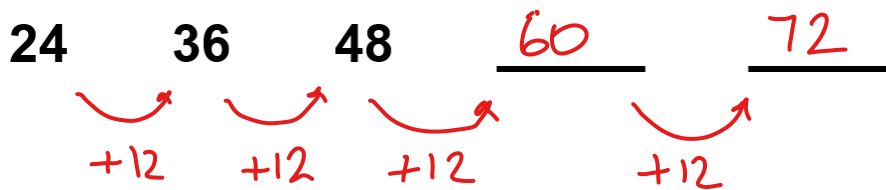
2.

Mina looks at the seat numbers on the end of each row.

The numbers go up in sequence.

What will the next two numbers be?

[1 mark]



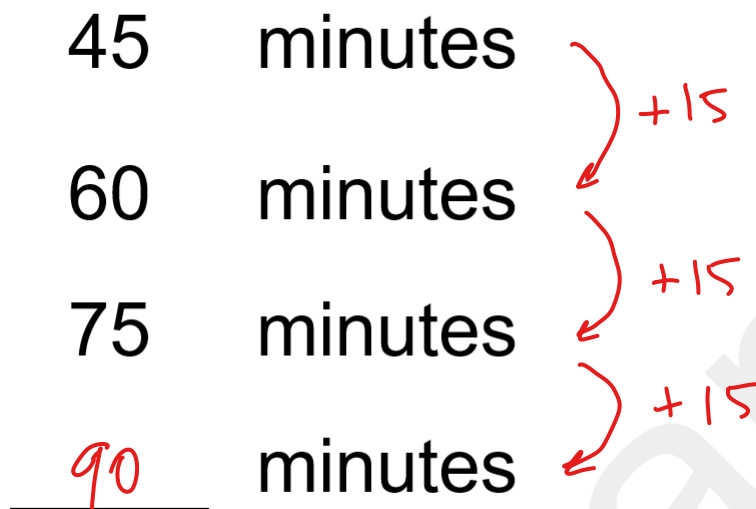
3.

Alex can book different amounts of time on a computer.

The times go up in sequence.

What is the next number?

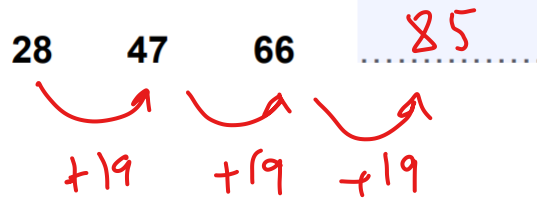
[1 mark]



City & Guilds

4.

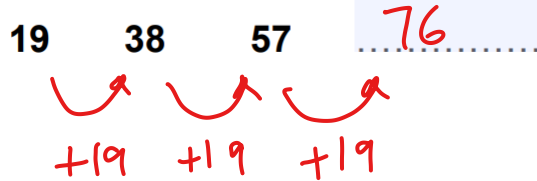
What is the next number in this sequence?



1 mark

5.

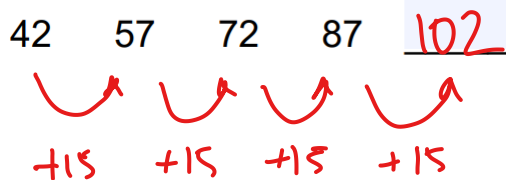
What is the next number in this sequence?



1 mark

6.

What is the next number in this sequence?



1 mark

Open Awards

7.

(1 mark)

Complete the sequence of numbers below.

9	18	27	36	45	54	63	72
---	----	----	----	----	----	----	----


+9 +9 +9 +9 +9 +9 +9