

Non-calculator Questions

NCFE

1.

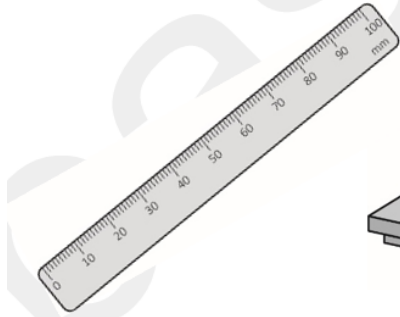
Paulo has got another box of sweets.

He measures this box to see if it will fit on the shelf.


What instrument should he use?

Tick (✓) your answer.

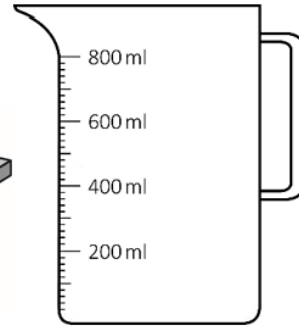
[1 mark]



A (✓)



B ()



C ()

City & guilds

2.

Which one of these measuring instruments is **best** to measure 100g sugar?
Tick one.

A



B



C



D



1 mark

Calculator Questions

NCFE


1.

Amy weighs some flour.

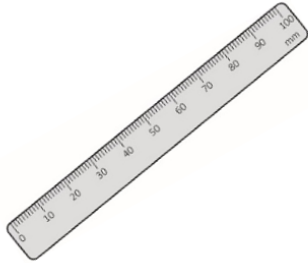
Which instrument does she use?

Tick (✓) your answer.


[1 mark]



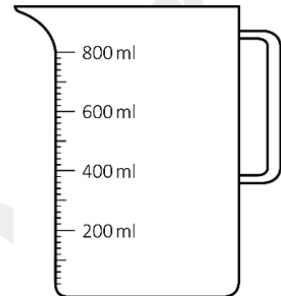
A ()



B ()



C (✓)



D ()

2.

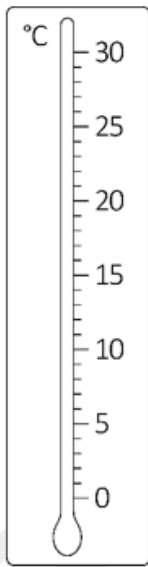
Jamie makes doughnuts.

He measures the amount of milk he needs.

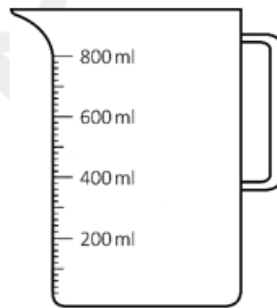
Which instrument should he use?

Tick (✓) your answer.


[1 mark]



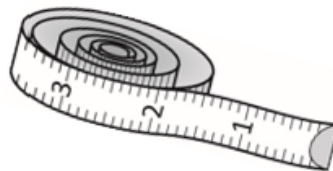
A ()



B (✓)



C ()



D ()

3.

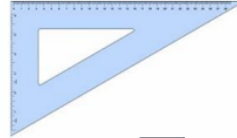
Which one of these measuring instruments is the most suitable to measure a person's waist?
Tick one.



A



B



C



D

1 mark

4.

Which one of the following is the **best** to weigh butter?
Tick one.



A



B



C



D

1 mark