

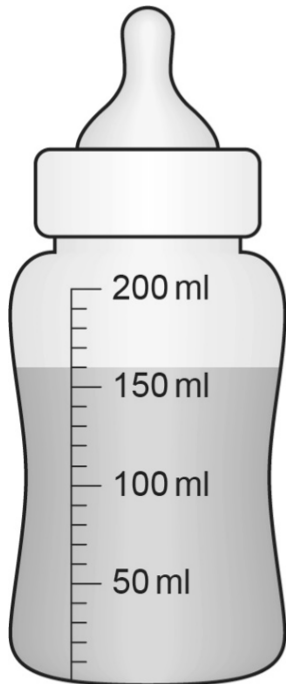
Non-calculator Questions

NCFE

1.

Dave feeds milk to the lambs.

He uses a bottle.



How much milk is in the bottle to the nearest **labelled** division?

[1 mark]

150 ml

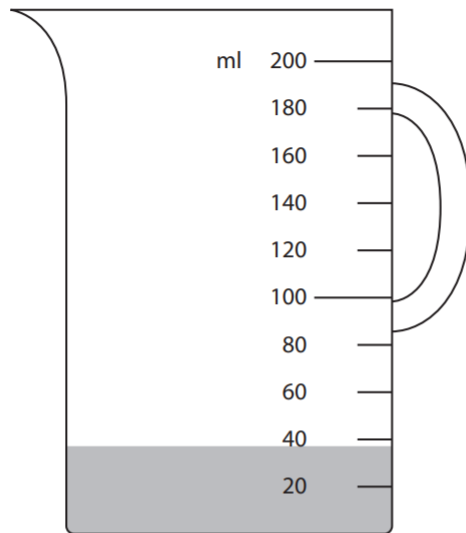
Calculator Questions

Edexcel

1.

Alex makes a mixture of screen wash and water.

He pours screen wash into a measuring jug.



Alex will add 80 ml of water to the jug.

How much mixture will he have to the nearest division?

Use the correct unit for capacity.

(3)

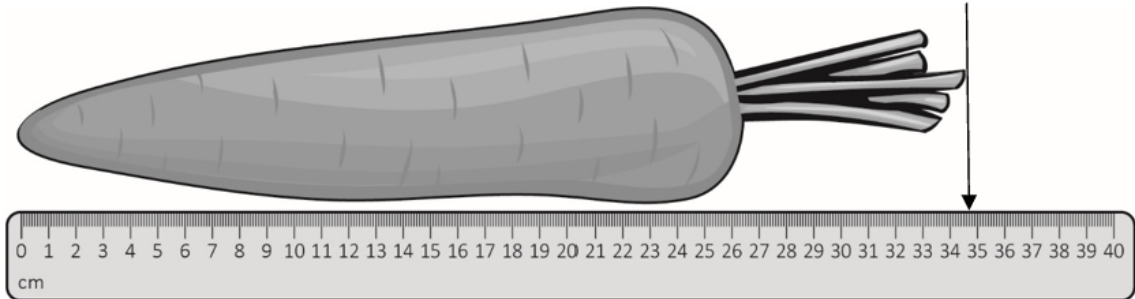
Show your answer in the box below.

40 ml

NCFE

2.

Jay measures a carrot.



How long is the carrot to the nearest **labelled** division?

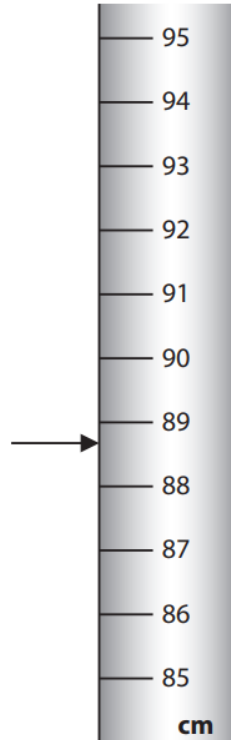
[1 mark]

35 cm

3.

Lucy puts a lamp into a box.

The arrow shows how tall the lamp is.



The box is 6 cm taller than the lamp.

How tall is the box to the nearest division?

Use the correct unit.

(3)

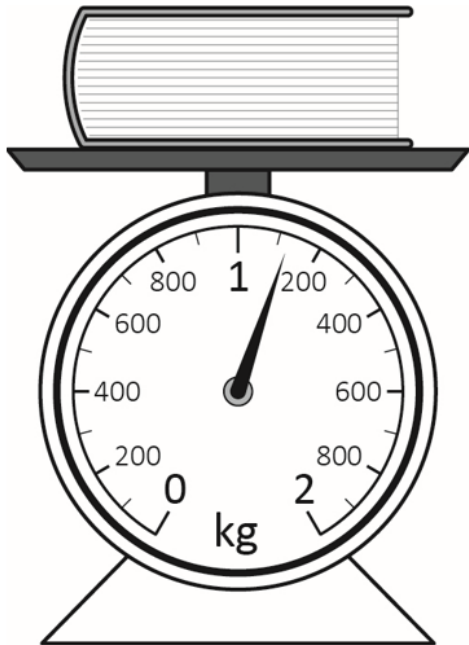
Show your answer here.

$$89 + 6 = 95 \text{ cm}$$

NCFE

4.

Kevin has a book to post to a customer.



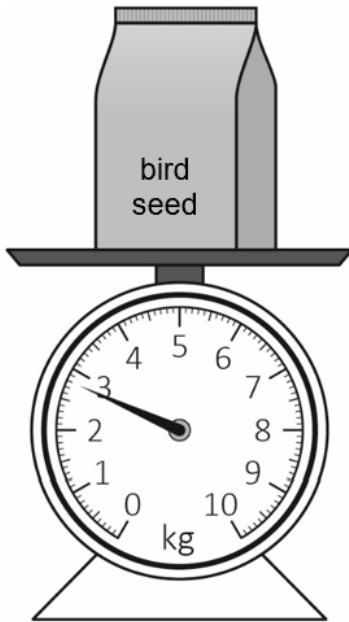
How much does it weigh to the nearest **labelled** division?

[1 mark]

1 kg 200 g

5.

Jon buys a bag of bird seed to take home.



How much does the bag of bird seed weigh to the nearest kilogram?

[1 mark]

3 kg