

Non-calculator Questions

City & Guilds

1.

A charity shop receives a box of jumpers to sell. The manager asks a volunteer to count the number of jumpers in the box.



What number does she tell the manager?

42

1 mark

2.

Count these crosses.

X X X X X X X X X X 10

X X X X X X X X X X 20

X X X X X X X X X X 30

X X X X X X X X X X 40

X X X X X X X X

How many crosses (X) are there?

48

1 mark

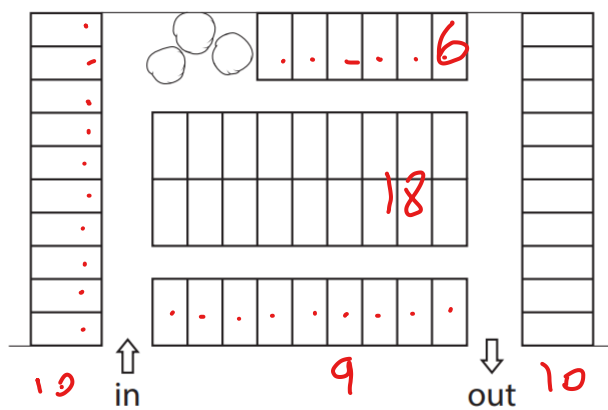
Calculator Questions

Edexcel

1.

Alex parks his car at the company where he works.

These are the parking spaces.



Key: is one parking space

The company needs 57 parking spaces.

Are there enough parking spaces?

Show why you think this.

(1)

Show your answer in the box below.

$$\begin{array}{r}
 10 \\
 10 \\
 18 \\
 9 \\
 6 \\
 \hline
 53
 \end{array}$$

53 parking spaces

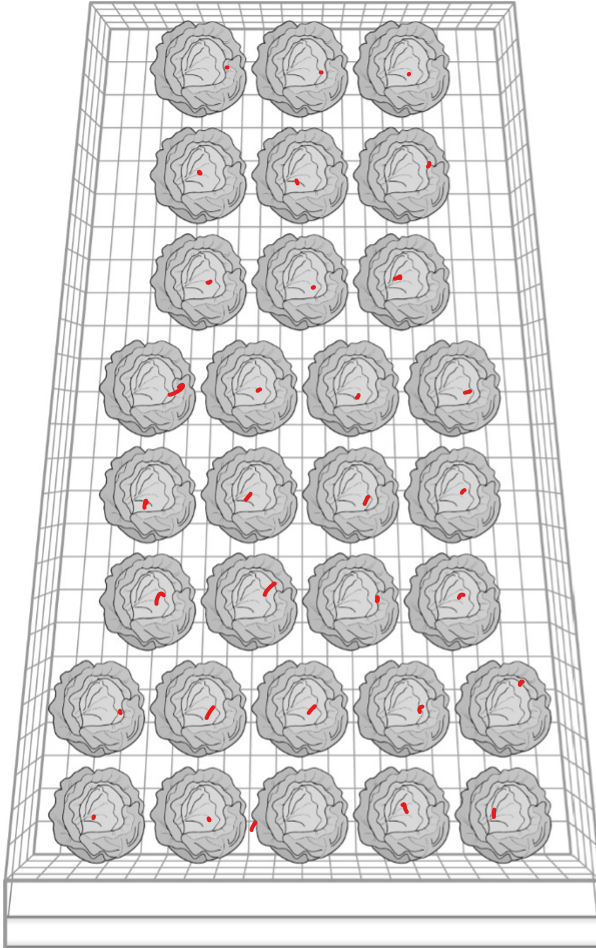
Tick (✓) the correct answer.

Yes () No (✓)

NCFE

2.

Safi picked these cabbages.



How many cabbages has Safi picked?

[1 mark]

31

3.

Jon takes a photo of these birds.



How many birds are there?

[1 mark]

25

4.

Lee picks these flowers from his garden.



How many flowers does he pick?

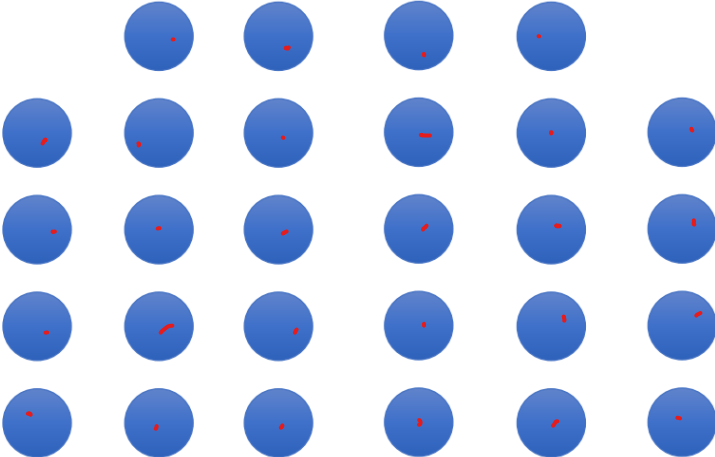
[1 mark]

41

City and Guilds

5.

Count these tablets.



How many tablets are there?

28 tablets

1 mark

6.

Count these flower pots.

8
16
24
32
40
48
55

How many flower pots are there?

55

1 mark