

Non-calculator Questions

City & Guilds

1.

Put these measures in order. Start with the smallest.

175 ml

75 ml

108 ml

59 ml

59ml 75ml 108ml 175ml

1 mark

2.

A passenger can only take things on a plane which are less than 100ml.



Tick all of the things the passenger can take on the plane.

1 mark

Calculator Questions

NCFE

1.


Workers bring bottles of water to work.

Tom brings the bottle that can hold the most water.

Which bottle does Tom bring?

Tick (✓) your answer.

[1 mark]



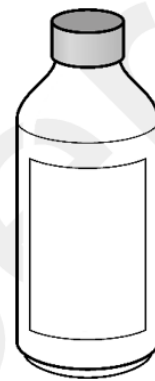
12 litres
A (✓)



200 ml
B ()



2 litres
C ()



120 ml
D ()

2.

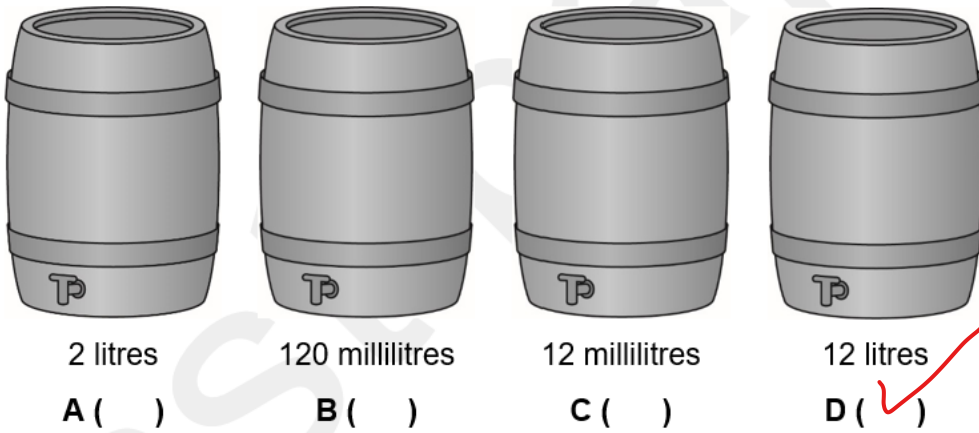
Jay collects rain in water tanks.

He sees how much water is in each tank.

Which water tank has the most water?

Tick (✓) your answer.

[1 mark]



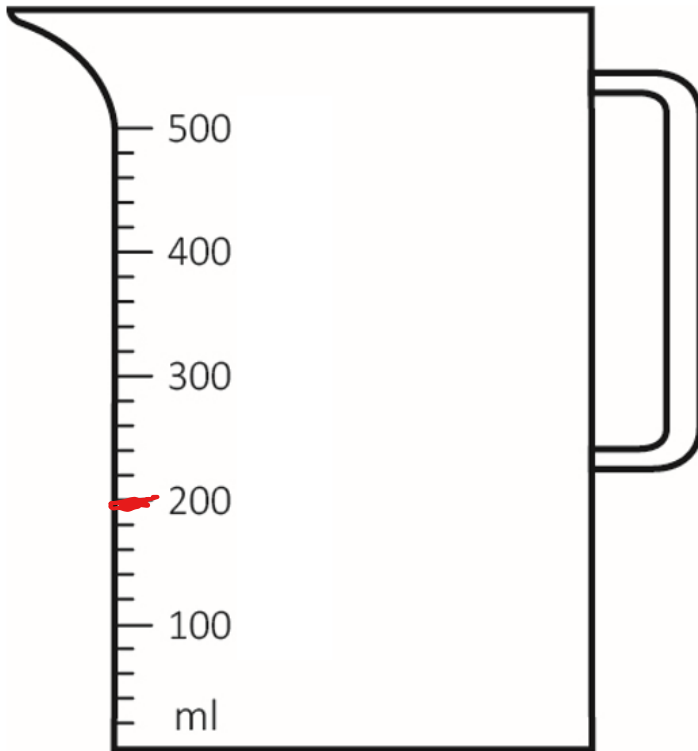
3.

Jon uses a jug to fill the bird bath in his garden.

He puts 200 ml of water in this jug.

Show where 200 ml is on this jug.

[1 mark]



4.

Lee uses plant food.

He wants to use the bottle with the most plant food.

Which bottle does Lee use?

Tick (✓) your answer.

[1 mark]



1 litre
A ()



2 litres
B (✓)



190 ml
C ()

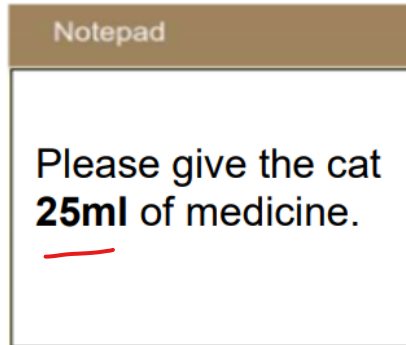


90 ml
D ()

City & Guilds

5.

The vet gives this note to the nurse.



The nurse uses this 5ml syringe.
She fills it with medicine.



How many full syringes of medicine should she give the cat?

Show your working out.

$$25 \div 5 = 5$$

5

2 marks