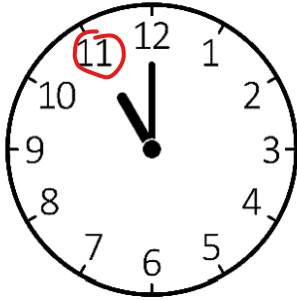


Non-calculator Questions

NCFE

1.

Rob gets to the tram station at the time below.



What time does he get to the tram station?

[1 mark]

11 o'clock

2.

Evie opens the shop at seven o'clock.

Which clock shows seven o'clock?

Tick (✓) your answer.

[1 mark]



A ()



B ()



C (✓)



D ()


3.

Dylan arrives at the stables at eight o'clock.

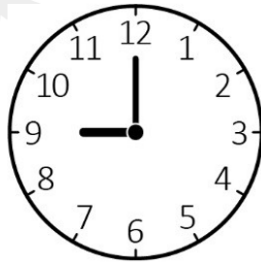
Which clock shows when he arrives at the stables?

Tick (✓) your answer.


[1 mark]



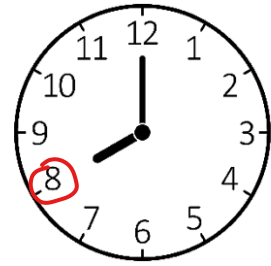
A ()



B ()



C ()



D (✓)

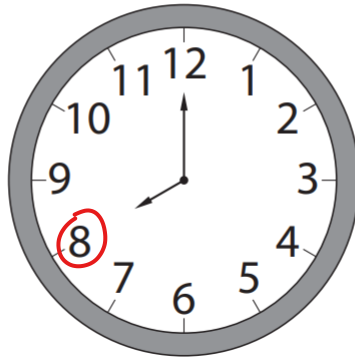
Calculator Questions

Edexcel

1.

Lela works in a restaurant.

The clock shows the time Lela starts work.



What is the time on the clock?

(1)

Show your answer in the box below.

_____ 8 _____ o'clock

2.

- The clock shows the time a yoga class starts.



Rita says the yoga class starts at one o'clock.

Is Rita correct?

Show why you think this.

(2)

Show your answer here.

No, it starts at 10 o'clock.

Tick (✓) the correct answer.

Yes () No (✓)

NCFE

3.

Alex starts his lunch break at one o'clock in the afternoon.

Which clock shows one o'clock?

Tick (✓) your answer.

[1 mark]



A ()



B (✓)



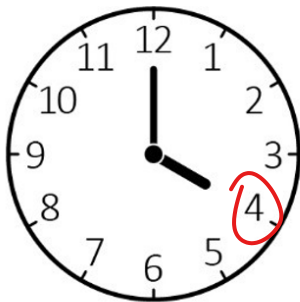
C ()



D ()

4.

The clock shows the time Elisha arrives at the museum.



What time does the clock show?

[1 mark]

4 o'clock

5.

The delivery arrives at the shop at nine o'clock in the morning.

Which clock shows nine o'clock?

Tick (✓) your answer.

[1 mark]



A (✓)



B ()



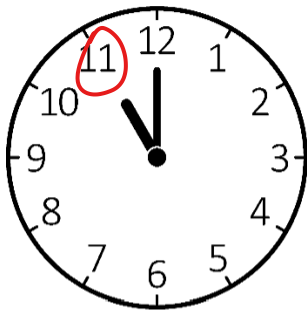
C ()



D ()

6.

The clock shows the time that Penny delivers the computer.



What time does the clock show?

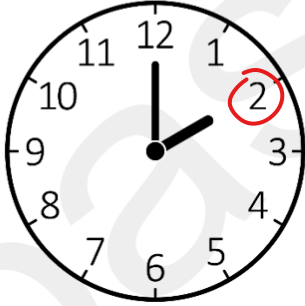
[1 mark]

11 o'clock

7.

Rosie and her mum receive parcels in the post.

Rosie looks at the clock when the parcels arrive.



What time do the parcels arrive?

[1 mark]

2 o'clock


8.

Rosie starts school at nine o'clock.

Which clock shows nine o'clock?

Tick (✓) your answer.

[1 mark]



A ()



B ()



C ()



D (✓)

City & Guilds

9.

A man wants to order a cake before the bakery closes.
The bakery closes at 5 o'clock.

The man checks the time on his watch.



Is the bakery open now?
Give a reason for your answer.

Yes/No..... No

Reason It is now 6 o'clock.

2 marks

10.

A woman wants to order cupcakes for all the people in her office.
There are 18 people.

The bakery sells cupcakes in these boxes.



$$9 + 9 = 18$$

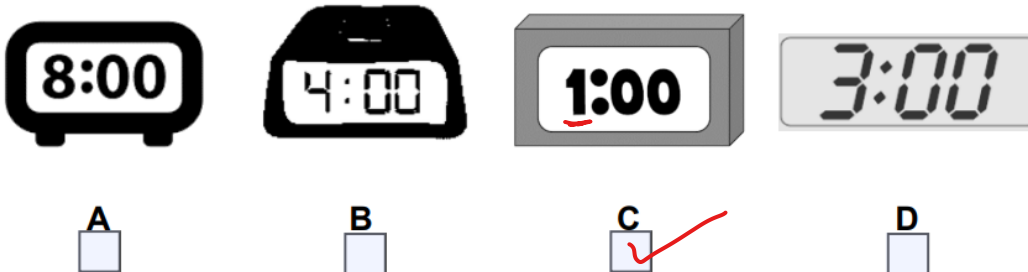
- a How many boxes of cupcakes does she need to order?
Give a reason for your answer.

Number of boxes 2

Reason Because $9 + 9 = 18$

2 marks

She tells the baker she will pick up the cakes at 1 o'clock.



- b Which of these clocks shows the time she will pick up the cakes?
Tick one.

1 mark

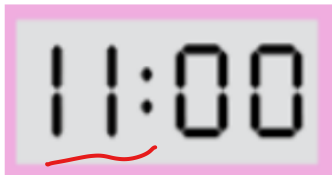
11.

A man visits a craft shop.

This is the sign on the door.



The man checks the time on his watch.



Is the shop open now?
Give a reason for your answer.

Yes/No..... *Yes*

Reason *It opened 1 hour ago.*

2 marks

12.

What time does the clock show?



8 o'clock

1 mark

13.

The chef asks the waiter to set the table at 6 o'clock.

The waiter checks his watch.



Should he start setting the table now?
Give a reason for your answer.

Yes/No

Yes

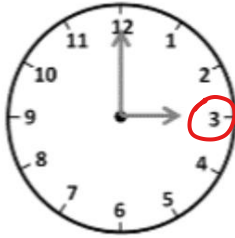
Reason

It's 6 o'clock.

2 marks

14.

The party will start at 3 o'clock.



A



B



C




D

Which of these clocks shows the time the party will start?
Tick one.

1 mark

15.

A man wants to catch the next bus from the bus station.
This is the bus timetable

	Number 7 bus times	
	Bus station	3 o'clock
	Bus station	<u>5 o'clock</u>
	Bus station	7 o'clock
Bus station	9 o'clock	

The man checks the time on his clock.



What is the time of the **next** bus the man can catch?
Give a reason for your answer.

Reason 5 o'clock as it comes right
after 4 o'clock.

2 marks

Open Awards

16.

(1 mark)

Tick the clock that shows 7 o'clock.

