

Non-calculator Questions

NCFE


1.

Badges come in different shapes.


Which of these shapes is a circle?

Tick (✓) your answer.


[1 mark]



A ()



B (✓)



C ()




D ()

City & Guilds

2.

What is the name of this shape?



circle

1 mark

Calculator Questions

Edexcel

1.

Lela needs a table with a square top.

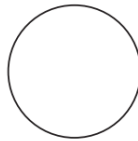
Which table has a square top?

(1)

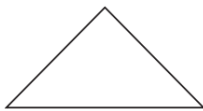
Tick (✓) the correct shape.



()



()



()



(✓)

2.

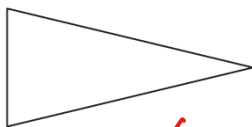
Rita needs a sign for the fun run.

She chooses a sign with the shape of a triangle.


Which shape is a triangle?

(1)

Tick (✓) the correct answer.




(✓)



()



()



()

Entry 1 Maths Shapes Exam Questions

NCFE


3.

Rob drives around the city and sees road signs.

He sees a sign that is round and another sign that is a triangle.

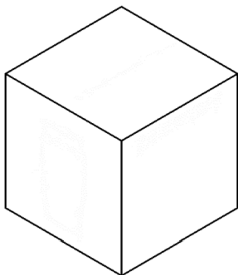
Tick (✓) the signs he sees.

[2 marks]



4.

The helmet is in a box.



Name the 3D shape of the box.

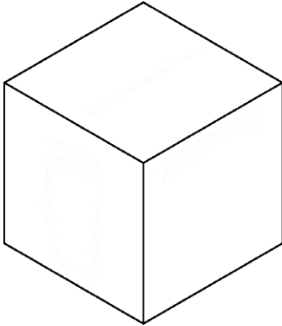
[1 mark]

cube

5.

Evie takes some shampoo bottles out of a box.

This is the shape of the box.



What is the name of this 3D shape?

[1 mark]

cube


6.

The shape of the computer power button is a triangle.


Which of these shapes is a triangle?

Tick (✓) your answer.

[1 mark]




A ()



B ()



C ()



D (✓)


7.

One of the parcels is a cube.

Which of these shapes is a cube?

Tick (✓) your answer.

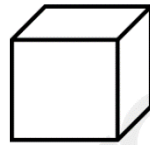
[1 mark]



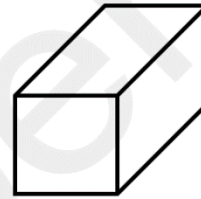
A ()



B ()



C (✓)



D ()

8.

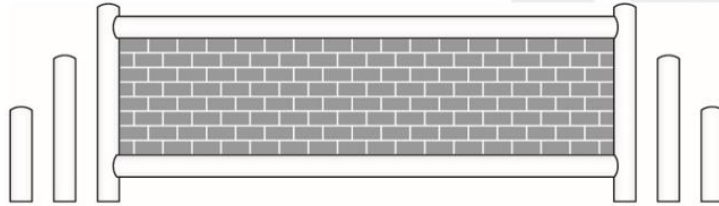
Dylan sets up the horse jumps.

Which jump has triangles on it?

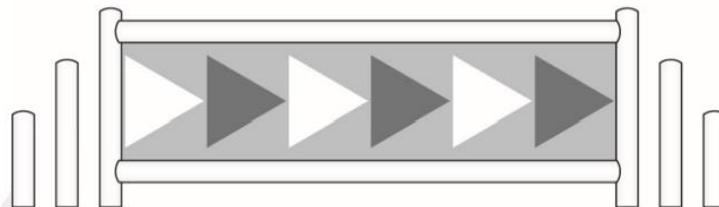
Tick (✓) your answer.

[1 mark]

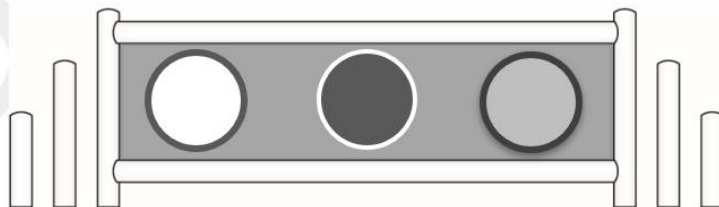
A ()



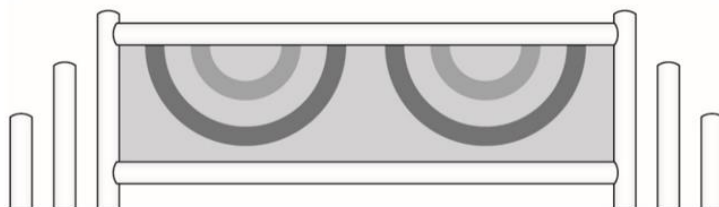
B (✓)



C ()




D ()



City & Guilds

9.

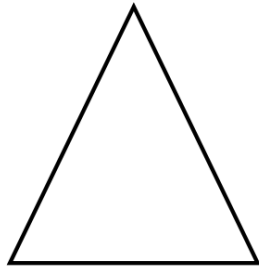
The baker has these biscuits.



Tick the square biscuits the baker needs for the order.

2 marks

10.



What is the name of this shape?

triangle

1 mark

11.



What is the name of this shape?





rectangle

1 mark

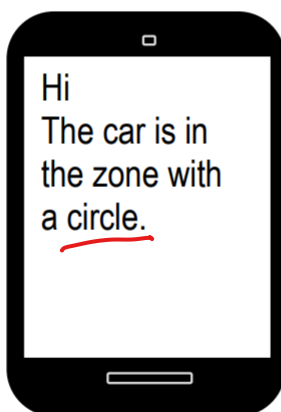
12.

A woman parks her car in a car park at the airport.

The car park has four zones.

			
Zone 1	<u>Zone 2</u>	Zone 3	Zone 4

She sends her husband a text message.



Which zone did the woman park in?

Zone.....





2

1 mark

13.

(1 mark)

Tick the biscuit that is the **shape** of a **triangle**.

			
<input type="checkbox"/>	<input checked="" type="checkbox"/>	<input type="checkbox"/>	<input type="checkbox"/>