

Non-calculator Questions

NCFE

1.

Evie has these chocolate bars.

Which chocolate bar is the biggest?

Tick (✓) your answer.

[1 mark]



2.

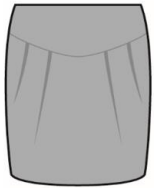
Rosie and her mum go shopping for a new school uniform.

Rosie chooses the longest skirt.


Which skirt does she choose?

Tick (✓) your answer.

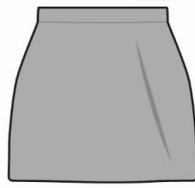
[1 mark]



A ()



B (✓)




C ()



D ()

City & Guilds

3.



Student X

Student Y

Student Z

Which one of the following statements is true?
Tick one.

- A Student X is shorter than Student Z
- B Student Y is taller than Student X
- C Student Z is taller than Student Y
- D Student X is shorter than Student Y

1 mark

4.

Tick the longest table.



A



B



C



D

1 mark

5.



Jug A



Jug B

Jug A has Jug B.

Choose the correct words to finish the sentence.

- A the same amount of water as
- B less water than
- C more water than
- D an equal amount of water to

1 mark

6.

The craft shop has a delivery of wooden ducks.

The ducks are all different heights.

13cm 8cm 5cm 20cm 14cm

Write these heights in order.

Start with the **biggest** first.

20 cm 14 cm 13 cm 8 cm 5 cm

1 mark

7.

12 kg is 14 kg.

Choose the correct words to finish the sentence.

A the same as

B lighter than

C heavier than

D more than

1 mark

Calculator Questions

Edexcel

1.

Lela needs a pan.

She chooses the pan that holds the most.

Which pan does Lela choose?

(1)

Tick (✓) the correct answer.



holds 12 litres ()



holds 16 litres (✓)



holds 10 litres ()



holds 15 litres ()

2.

Rita plans a fun run at the sports centre.

People choose the distance they want to run.

Jack will run the shortest distance.

Which distance will Jack run?

(1)

Tick (✓) the correct answer.

8 km

()

14 km

()

11 km

()

5 km

(✓)

NCFE

3.

Three buses are in the bus station.

Which is the longest bus?

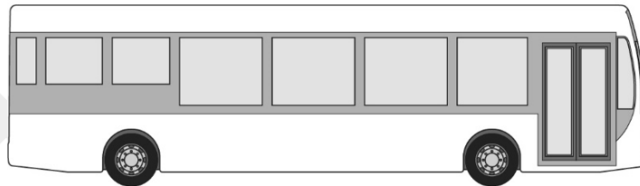
Tick (✓) your answer.

[1 mark]

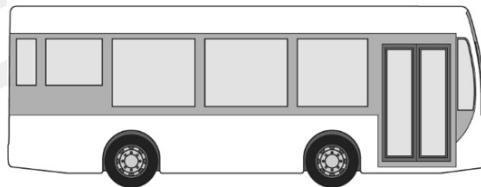
A ()



B (✓)



C ()



4.

Rob parks the moped.

He parks in the widest space.

Which is the widest space?

Tick (✓) your answer.

[1 mark]



A ()



B ()



C (✓)



D ()

5.

There are some pictures on a wall.

Alex cleans the widest picture.


Which picture does Alex clean?

Tick (✓) your answer.


[1 mark]




A ()



B ()



C (✓)

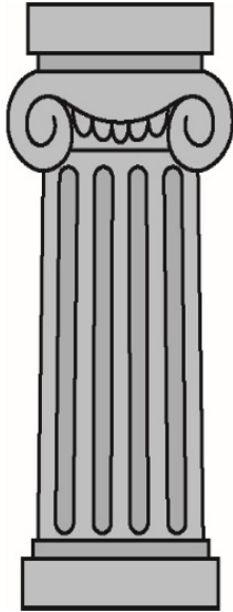


D ()

6.

Elisha looks at a column and a bowl in the museum.

The column and the bowl are made of the same type of stone.



column



bowl

What does Elisha say?

Tick (✓) your answer.

[1 mark]

- A (✓) The column is heavier than the bowl.
- B () The column is lighter than the bowl.
- C () The bowl and the column weigh the same.
- D () The bowl is heavier than the column.

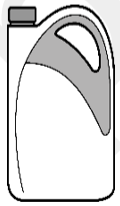
7.

These bottles of washing liquid were in the delivery.

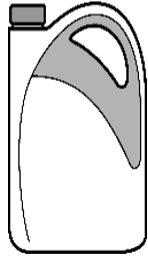
Which bottle can hold the most washing liquid?

Tick (✓) your answer.

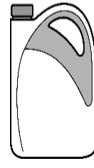
[1 mark]



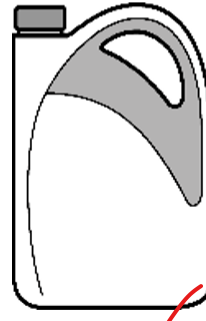
A ()



B ()



C ()



D (✓)

8.


Evie puts some bottles of water on a shelf.

She puts the tallest bottle at the back of the shelf.

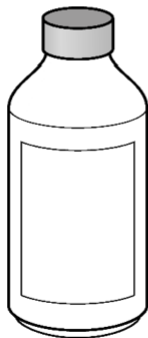
Which bottle does Evie put at the back of the shelf?

Tick (✓) your answer.


[1 mark]



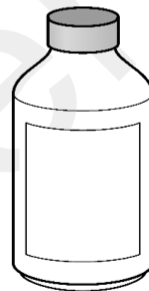
A ()



B ()



C (✓)



D ()

9.

Fez looks at computer screens in a shop.

He buys the widest screen.

Which screen does Fez buy?

Tick (✓) your answer.

[1 mark]



A ()



B ()



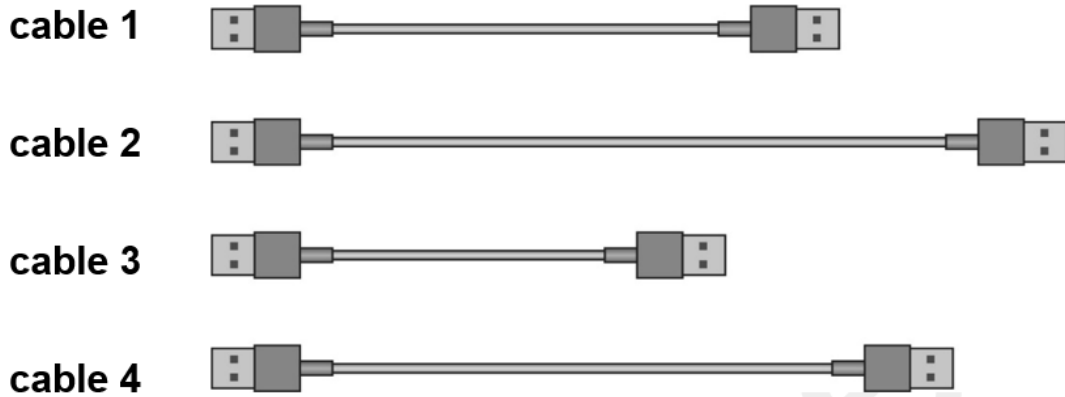
C (✓)



D ()

10.

Fez looks at these printer cables.



What does he say?

Tick (✓) your answer.

[1 mark]

- A () cable 1 is shorter than cable 3
- B (✓) cable 2 is longer than cable 3
- C () cable 3 is longer than cable 1
- D () cable 4 is the shortest


11.

The tracksuit is in the widest parcel.


Which parcel is the tracksuit in?

Tick (✓) your answer.


[1 mark]




A ()



B (✓)



C ()



D ()

12.

Rosie and her mum look at pencil cases.

Rosie buys the largest pencil case.


Which pencil case does Rosie buy?

Tick (✓) your answer.

[1 mark]




A ()



B ()



C ()



D (✓)

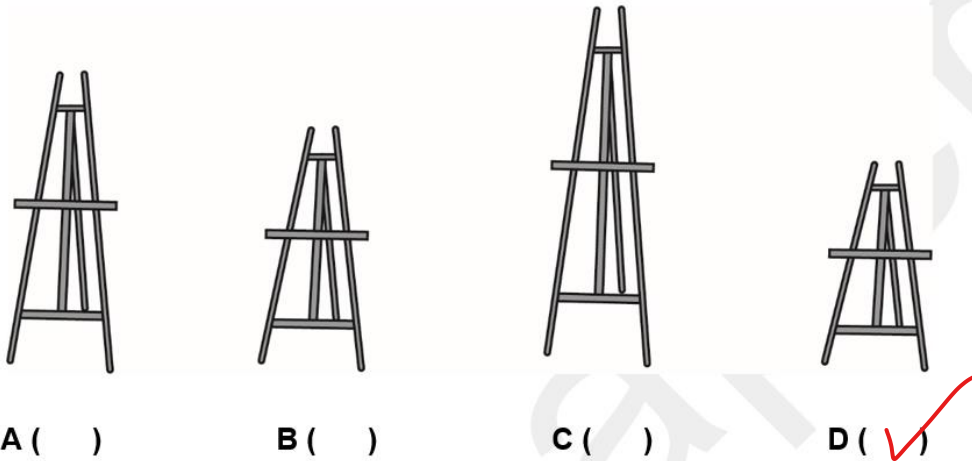
13.

Rosie puts her poster on the shortest stand.

Which stand does she put her poster on?

Tick (✓) your answer.

[1 mark]



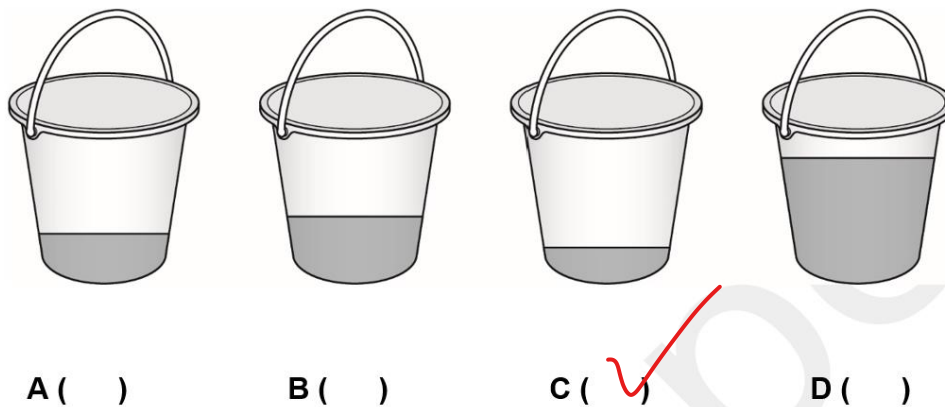
14.

Dylan fills buckets with water.

Which bucket has the least amount of water?

Tick (✓) your answer.

[1 mark]



15.

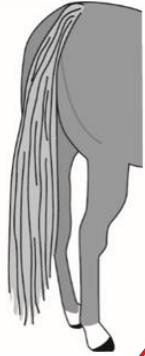
Which horse has the longest tail?

Tick (✓) your answer.

[1 mark]



A ()



B (✓)



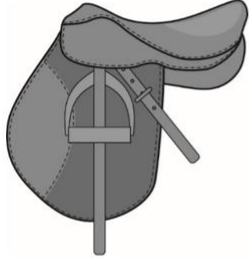
C ()



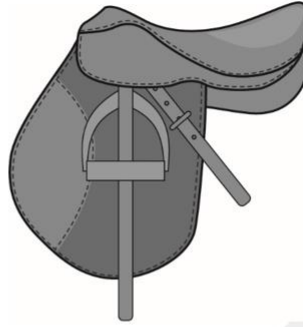
D ()

16.

Dylan gets these two saddles.



saddle 1



saddle 2

What does Dylan say about the saddles?

Tick (✓) your answer.

[1 mark]

A () saddle 1 is larger than saddle 2

B () saddle 1 is the same size as saddle 2

C () saddle 2 is smaller than saddle 1

D (✓) saddle 2 is larger than saddle 1

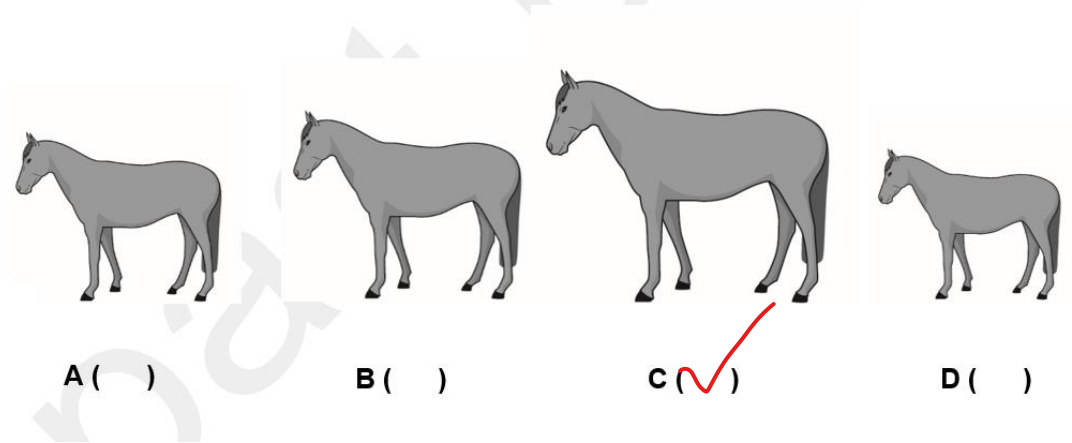
17.

Dylan rides the tallest horse.

Which is the tallest horse?

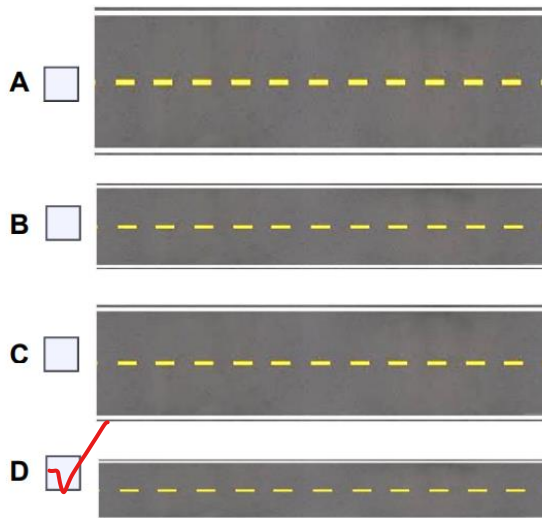
Tick (✓) your answer.

[1 mark]



City & Guilds

18.




Which one of these roads is the **narrowest**?
Tick one.

1 mark

19.a)

A customer wants to buy a plate to paint.
She wants to paint the biggest plate.

She sees these plates.



Tick which plate she will buy.

1 mark

b)

The woman pays with this note.



How much change will she get? **Put units on your answer.**


Show your working out

$$20 - 10 = 10$$

Change £ 10

3 marks

20.



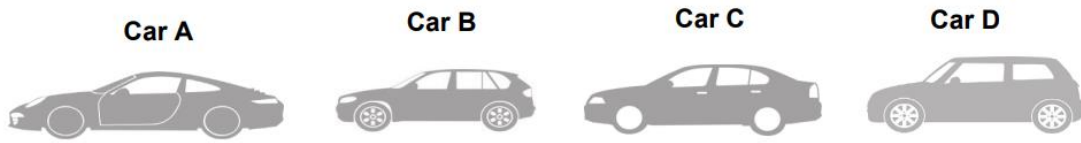
Which one of the following statements is true?
Tick one.

- A Cake X is bigger than Cake Y.
- B Cake Y is smaller than Cake Z.
- C Cake Y is bigger than Cake X.
- D Cake Z is smaller than Cake X.

1 mark

21.

Here are four cars.



A customer wants to buy the smallest car to fit in his garage.

Which car should he buy?
Tick one.

- | | | |
|---|-------|-------------------------------------|
| A | Car A | <input type="checkbox"/> |
| B | Car B | <input checked="" type="checkbox"/> |
| C | Car C | <input type="checkbox"/> |
| D | Car D | <input type="checkbox"/> |

1 mark





Open Awards

22.

(1 mark)

Which item is the heaviest?

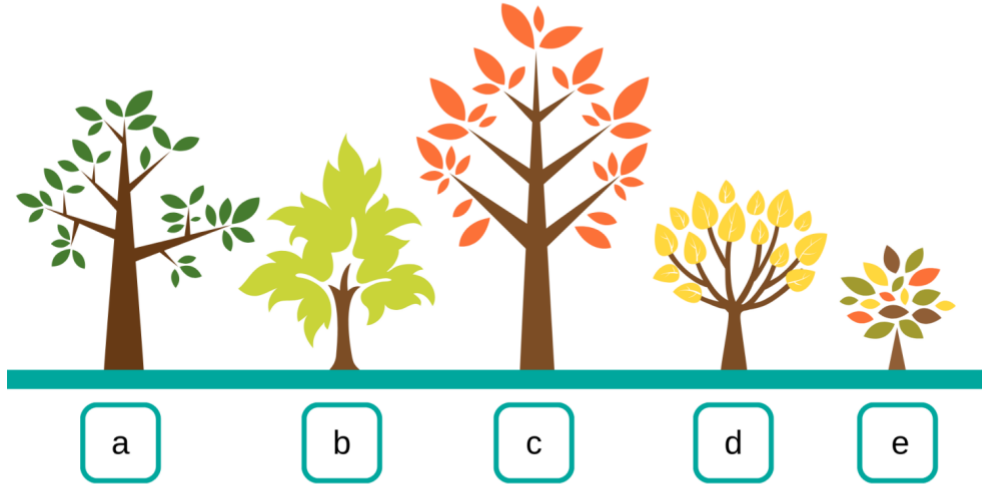
Tick the item.

 <input type="checkbox"/> 4 kilograms	 <input type="checkbox"/> 5 kilograms
 <input type="checkbox"/> 2 kilograms	 <input checked="" type="checkbox"/> 7 kilograms

23.

(2 marks)

There are **five trees** in the garden. They are all different **heights**.



Put the trees in order of **height** in the table below.

Start with the shortest tree.

Shortest					Tallest
e	d	b	a	c	