

Non-calculator Questions

NCFE

1.

Dylan goes to the stables.

He goes two days after Monday.

On which day does Dylan go to the stables?

[1 mark]

Mon Tue Wed
Wednesday

City & Guilds

2.

Write these months of the year in order.
Start with **May**.

May November September August

May August September November

1 mark

3.

How many months are there in one year?

12 months 1 mark

4.

How many days are there in one week?

7 days 1 mark

Calculator Questions

Edexcel

1.

Lela has these packs of flour in January.

She uses them in the order of the month on the label.

Which pack will she use first?

(1)

☐

Tick (✓) the correct pack.

June

()

March

(✓)

September

()

April

()

2.

Rita has posters of classes in different seasons.

Rita uses the posters in the order of the seasons.


She uses the first poster in the spring.

Which poster will Rita use next?

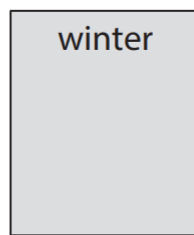
(1)

☐

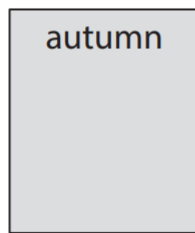
Tick (✓) the correct poster.



()



()



()



(✓)

NCFE

3.

Rob asks the man in the shop about hiring a moped.

The man says that they are fully booked for the two months that are missing below.

Write the missing months in the table.

[2 marks]

Months of the year

January
February
March
April
May
June
July
August
September
October
November
December

4.

Alex works every day from Wednesday to Friday.

What is the missing day?

[1 mark]



5.

Elisha visits the museum in May.

She will visit again in three months.

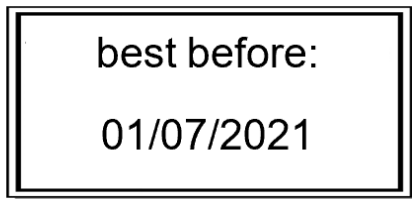
In which month will Elisha visit the museum again?

[1 mark]



6.

Evie checks the date on a tin of beans.



What is the name of the 7th month in a year?

[1 mark]

July

7.

Evie gets a delivery on Thursday.

The last delivery was three days before Thursday.

On what day was the last delivery?

[1 mark]

Mon Tue Wed Thu
Mon

8.

Fez buys a game in summer.

He will buy a new game in the season after summer.

In which season will Fez buy the new game?

[1 mark]

autumn

9.

Fez and his friends play on Friday.

They play again two days later.

On what day do they play again?

[1 mark]

Fri Sat Sun

Sunday

10.

Fez buys the computer in August.

The shop will deliver the computer in the month after August.

In which month will the shop deliver the computer?

[1 mark]

September

11.

Rosie and her mum order the items on Wednesday.

They will arrive in two days.

Rosie thinks the items will arrive on Thursday.

Is she correct?

Give a reason for your answer.

[2 marks]

Wed Thu Fri

No, they will arrive on
Friday.

12.

Rosie draws a poster showing all of the seasons in a year.

How many seasons are on the poster?

[1 mark]

4

13.

The stables are only open in spring, summer and autumn.

In which season are the stables closed?

[1 mark]

winter

City & Guilds

14.

Write these months in the correct order.
Start with **June**

June

December

October

August

July

June July August October December

1 mark

15.

The shop assistant tells the man the craft shop does not open on Sunday.

How many days of the week is the shop open?

$$7 - 1 = 6$$

.....6..... days

1 mark