

Non-calculator Questions

NCFE

1.

The bus to college leaves at this time in the morning.



The bus journey takes 20 minutes.

It will then take Alex 12 minutes to walk to his classroom.

What time will Alex get to his classroom?

Write your answer in numbers using the 12 hour clock format.

[3 marks]

A large empty rectangular box provided for the student to write their answer.

2.

Rishi plans the times that the bands will be on stage.

The last band will play for 50 minutes.

It must finish at 10.30 pm

What time must the last band start playing?

Write your answer in numbers using the 12 hour clock format.

[2 marks]

A large empty rectangular box with a thin black border, intended for the student to write their answer. A faint watermark 'paper' is visible diagonally across the box.

Calculator Questions

Edexcel

1.

Riya wants to see a flat between 5:30 pm and 6 pm.

She chooses a time to see the flat.

When will Riya see the flat?

(1)

Tick (✓) the correct answer.

16 : 40

()

15 : 40

()

17 : 40

()

05 : 40

()

18 : 40

()


06 : 40

()

2.

Bret makes a delivery to a customer in the afternoon.

He looks at the time on a clock.



What time does Bret make the delivery?

Use the correct time format.

(2)

Show your answer here.

NCFE

3.

Mina looks at the film times.

Journey to the Stars	
start time	6.20 pm
end time	8.35 pm

Love in London	
start time	6.35 pm
end time	8.25 pm

Secret in the Stone	
start time	7.25 pm
end time	8.55 pm

They need to be out of the cinema by half past eight in the evening.

Which film should they watch?

[1 mark]

4.

Mina and her friends get to the bus stop at quarter to three in the afternoon.

The next bus is due in 17 minutes.

What time is the next bus due?

Write your answer in numbers using the 12 hour clock format.

[2 marks]

A large empty rectangular box with a thin black border, intended for the student to write their answer. A faint watermark reading 'paper' is visible diagonally across the box.

5.

Alex wants to hand in his report.

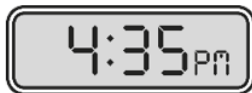
He sees this notice.

Reports must be handed in
between ten past four and ten to five
in the afternoon.

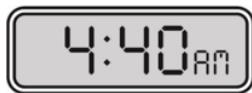
When can Alex hand in his report?

Tick (✓) two answers.

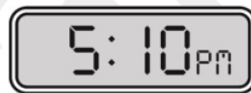
[2 marks]



A ()



B ()



C ()



D ()



E ()



F ()

6.

Claire's flight leaves at 6.35 pm

She has to be at the airport two hours before the flight leaves.

It will take her 55 minutes to get to the airport.

What is the latest time she could leave home?

Write your answer in numbers using the 12 hour clock format.

[3 marks]



7.

Alex starts work at 8.20 am

He works for three and a half hours then he starts his break.

At what time does Alex start his break?

Write your answer in numbers using the 12 hour clock format.

[2 marks]



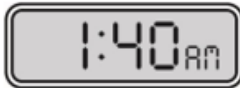
8.

Carly has lunch after her walk.

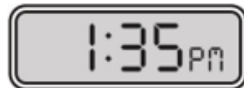
She has lunch between half past one and half past two in the afternoon.

Which clock shows the time she has lunch?

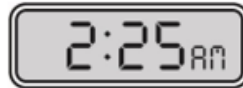
[1 mark]



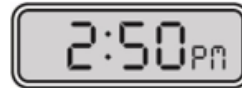
A ()



B ()



C ()



D ()

City & Guilds

9.

Yogurt is made in the farm dairy.

It takes **seven hours and thirty minutes** to make.

The dairy assistant begins to make the yogurt at **8am**

The farmer needs to know what time the yogurt will be ready.

What time will the dairy assistant tell her? Use **am** or **pm** in your answer.

Space for working out.

Time

1 mark

10.a)

An apprentice starts to work for a farmer.
He will work **30 hours each week**.

He uses this table to find out how much he should be paid
each week before any deductions are made.

Age	25 and over	21 to 24	18 to 20	Under 18	Apprentice
Hourly Pay	£8.72	£8.20	£6.45	£4.55	£4.15

What will the apprentice be paid **each week**?

Show your working out.

£.....

2 marks

b)

This week he has to work 30 hours.
He worked 7 hours **each day** on Monday, Tuesday and Wednesday.
He worked 4 hours on Thursday.

On Friday morning he checks the time on the clock
when he starts work.



What time can he finish work on Friday?
Use am or pm in your answer.

Space for working out.

Time to finish work

2 marks