

**Non-calculator Questions**

Edexcel

1.

Lyn pays for an internet contract.

**Internet contract**  
£27 each month for 18 months

**How much will Lyn pay in total for the internet contract? (2)**

Show your working and your answer in the box below.

£ \_\_\_\_\_

2.

Bret is planning a trip to see a football match.

He saves £85 each month for the trip.

He will save for 4 months.

**How much will he save in total?**

(2)

Show your working and your answer here.

£ \_\_\_\_\_

NCFE


3.

Claire has 11 months to save her spending money.

She saves £85 each month.

Work out how much money she saves in 11 months.

**[2 marks]**



4.


Amy bakes 22 cookies.

Each cookie needs 12 chocolate chips.

How many chocolate chips does Amy need in total?

**Show your working.**

**[2 marks]**



5.


Carly gets a dog from the shelter.

She needs pet insurance for her dog.

Carly finds insurance for £16 a month.

How much does this cost in total for 12 months?

**[2 marks]**



City & Guilds

6.

Work out **28 x 14 =**



**1 mark**

7.

Work out  $65 \times 8 =$



**1 mark**

Open Awards

8.

Work out  $53 \times 8$ .



**(2 marks)**

**Calculator Questions**

NCFE

1.


Mina and her friends decide to go to Style cinema.

This cinema has eight screens.

Each screen shows 21 films a week.

How many films does this cinema show in total each week?

**[2 marks]**




2.

Debra has 22 staff.

They each work 36 hours a week.

What is  $22 \times 36$ ?

**[1 mark]**



3.

Alex has finished his report.

The report is 24 pages long.

He has to print 11 copies of his report.

How many pages will Alex print in total?

**[2 marks]**



City & Guilds

4.

Work out  $45 \times 15 =$



**1 mark**