

Non-calculator Questions

NCFE

1.

Dave starts work at quarter past six.

Which clock shows quarter past six?

Tick (✓) your answer.


[1 mark]



A ()



B ()



C ()



D ()

2.a)

The owner says he can deliver the greenhouse.

The delivery date is 13/7/2021

May						
Mo	Tu	We	Th	Fr	Sa	Su
					1	2
3	4	5	6	7	8	9
10	11	12	13	14	15	16
17	18	19	20	21	22	23
24	25	26	27	28	29	30
31						

June						
Mo	Tu	We	Th	Fr	Sa	Su
	1	2	3	4	5	6
7	8	9	10	11	12	13
14	15	16	17	18	19	20
21	22	23	24	25	26	27
28	29	30				

July						
Mo	Tu	We	Th	Fr	Sa	Su
			1	2	3	4
5	6	7	8	9	10	11
12	13	14	15	16	17	18
19	20	21	22	23	24	25
26	27	28	29	30	31	

What day of the week does he deliver the greenhouse?

[1 mark]

b)

The greenhouse will be delivered at half past two.


Which clock shows half past two?

Tick (✓) your answer.

[1 mark]



A ()



B ()



C ()



D ()


3.

Daisy starts working at quarter to eight.

Which clock shows quarter to eight?

Tick (✓) your answer.

[1 mark]




A ()



B ()



C ()



D ()

Calculator Questions

Edexcel

1.

Alex needs his car repaired.

He wants his car repaired between the 30th August and the 10th September.

The garage gives Alex dates when they can repair his car.

Which date will Alex choose?

(1)

☐

Tick (✓) the correct answer.

Dates when the garage can repair the car

09/08/2019

()

18/09/2019

()

08/09/2019

()

19/08/2019

()

2.


Lucy wants to wake up before seven o'clock.

What time will Lucy set her alarm clock to?


(1)

☐


Tick (✓) the correct answer.




()



()



()



()

NCFE

3.

A customer borrows a DVD on the 15th April.

Jas tells the customer he can keep the DVD for 14 days.

On what date in April must the customer return the DVD?

[2 marks]

4.

Story time starts at 12.30

Which clock shows the start time?

Tick (✓) your answer.


[1 mark]



A ()



B ()



C ()



D ()

5.

Jon sees the date of a fundraising event in 2022



He writes the date on his note pad.

What will Jon write?

Tick (✓) your answer.

[1 mark]

11/02/2022

A ()

11/03/22

B ()

22/03/11

C ()

20/11/22

D ()

6.

Jon stops birdwatching at 4 o'clock in the afternoon.

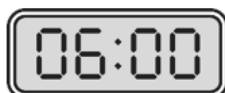
Which clock shows this time?

Tick (✓) your answer.

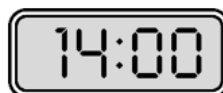
[1 mark]



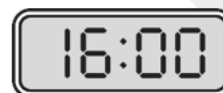
A ()



B ()



C ()



D ()

7.

Lee waters his plants at this time.



What is the time on the clock?

Tick (✓) your answer.

[1 mark]

1 o'clock

7 o'clock

5 o'clock

6 o'clock

A ()

B ()

C ()

D ()

8.

Tara must write the date on her time sheet.

The date is shown on the calendar.



How will Tara write the date?

Tick (✓) your answer.

[1 mark]

14/06/22

06/14/22

14/05/22

22/06/14

A ()

B ()

C ()

D ()

City & Guilds

9.

The receptionist makes a date for the man to bring the dog back to the vets.

She writes this date on a card for the man.

2021 MAY						
SUN	MON	TUE	WED	THU	FRI	SAT
						1
2	3	4	5	6	7	8
9	10	11	12	13	14	15
16	17	18	19	20	21	22
23	24	25	26	27	28	29
30	31					

Complete the card below with the date.



Vet Appointment

Name Mr. Adams

Date

Time 10:00 am

1 mark

10.a)

A man applies for a job in a charity shop.
He gets a letter asking him to attend an interview.

The interview will start at half past one in the afternoon.


Which one of these clocks shows the time the interview will start?
Tick one.



A
☐



B
☐



C
☐



D
☐ **1 mark**

b)

He needs to catch a bus to arrive in time for the interview.
He looks at the different bus numbers and their arrival times.



17:00



13:00



16:00



15:00

What number bus should he get? Give a reason for your answer.

Bus number.....


Reason

..... **3 marks**

11.

The gardener should finish his work shift at a quarter to 6.

He checks his watch.



Has he finished his shift?
Explain why you think your answer is correct.

Yes / No

I think my answer is correct because.....

.....

.....

2 marks

12.

A passenger's flight leaves at **one o'clock**.
He checks his watch.



Has his plane left?

Give a reason for your answer. Use the clock time to help you.

Yes/No

Reason.....

.....

1 mark

Entry 2 Time Exam Questions





Open Awards

13.

(1 mark)

Jo is going to college by bus. The next bus leaves at a quarter past ten.

Tick the clock that shows the **time** the bus leaves.

	<input type="checkbox"/>		<input type="checkbox"/>
	<input type="checkbox"/>		<input type="checkbox"/>