


**Non-calculator Questions**

City & Guilds

1.




What is the name of this shape?

.....

**1 mark**

2.

What is the name of this 3D shape?



.....

**1 mark**

**Calculator Questions**

Edexcel

1.

This is the shape of a can of cleaning spray.



**What is the name of this shape?**

**(1)**

Show your answer in the box below.

2.


Lucy sells a table.

The top of the table is a hexagon.

**Which shape is a hexagon?**

(1)

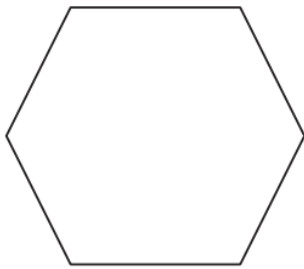
Tick (✓) the correct answer.




( )




( )



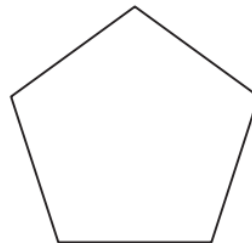
( )



( )



( )

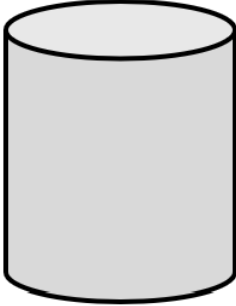


( )

NCFE

3.

The new computer has a speaker shaped like this.

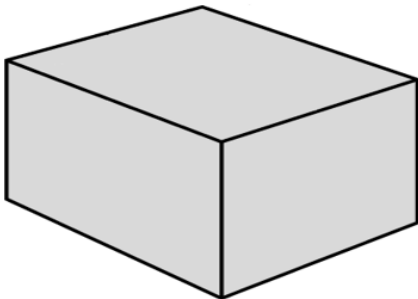


What is the name of this 3D shape?

[1 mark]

4.

Sam orders a box of bookmarks.



What is the 3D shape of the box?

[1 mark]

5.

Dave starts with the field that is in the shape of a hexagon.

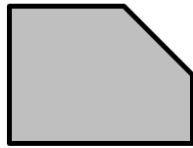
Which field does Dave start with?

Tick (✓) your answer.

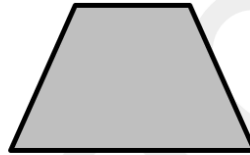
[1 mark]



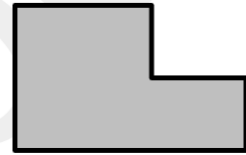
A ( )



B ( )



C ( )



D ( )

6.

The fencing comes in rolls like this.




What is the name of this 3D shape?

[1 mark]

7.

Jay also makes pea and potato snacks.

He cooks the peas and potatoes and rolls them into balls.




What is the name of this 3D shape?

**[1 mark]**

8.

Jon sees this birdhouse.




What is the name of this 3D shape?

**[1 mark]**

9.

Lee buys this water tank to catch rainwater.



What is the name of this 3D shape?

[1 mark]