

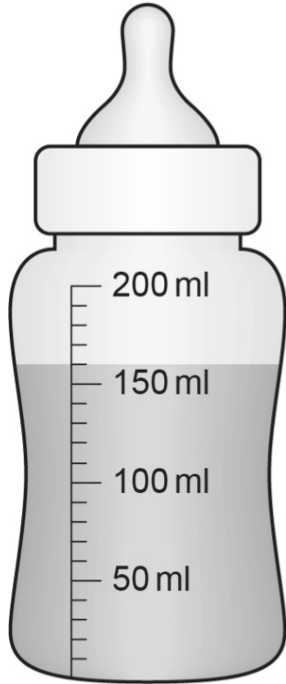
**Non-calculator Questions**

NCFE

1.

Dave feeds milk to the lambs.

He uses a bottle.



How much milk is in the bottle to the nearest **labelled** division?

**[1 mark]**

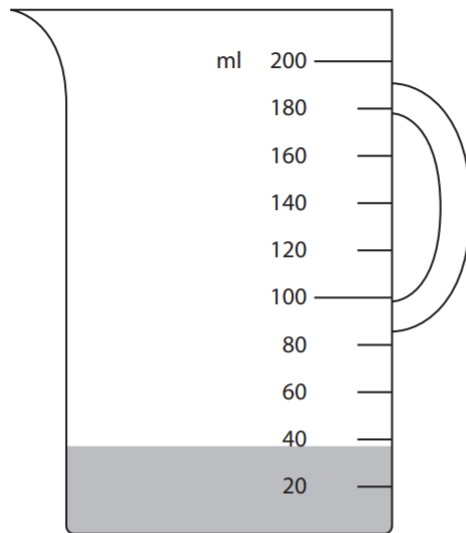
**Calculator Questions**

Edexcel

1.

Alex makes a mixture of screen wash and water.

He pours screen wash into a measuring jug.



Alex will add 80 ml of water to the jug.

**How much mixture will he have to the nearest division?**

**Use the correct unit for capacity.**

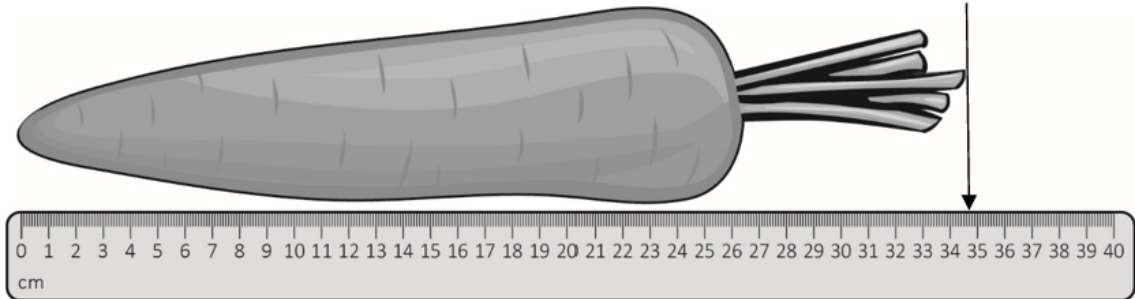
**(3)**

Show your answer in the box below.

NCFE

2.

Jay measures a carrot.



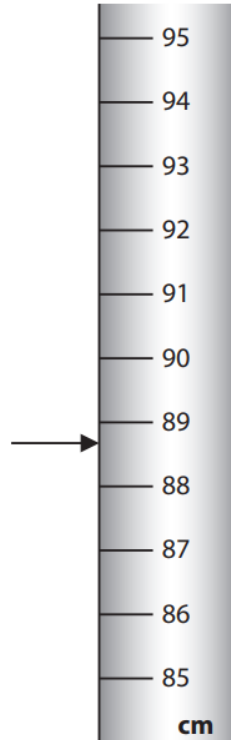
How long is the carrot to the nearest **labelled** division?

**[1 mark]**

3.

Lucy puts a lamp into a box.

The arrow shows how tall the lamp is.



The box is 6 cm taller than the lamp.

**How tall is the box to the nearest division?**

**Use the correct unit.**

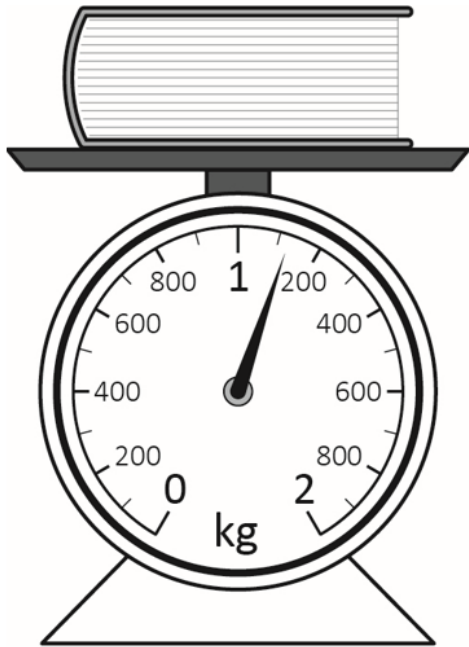
**(3)**

Show your answer here.

NCFE

4.

Kevin has a book to post to a customer.



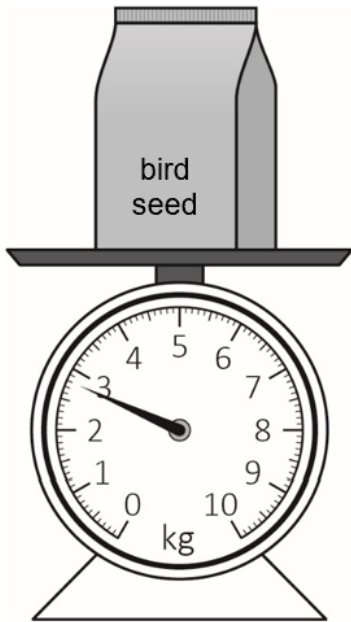
How much does it weigh to the nearest **labelled** division?

[1 mark]

\_\_\_\_\_ kg      \_\_\_\_\_ g

5.

Jon buys a bag of bird seed to take home.



How much does the bag of bird seed weigh to the nearest kilogram?

**[1 mark]**