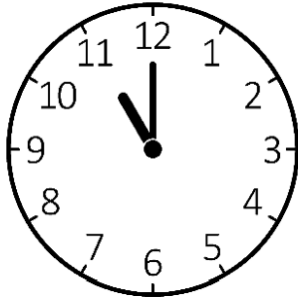


**Non-calculator Questions**

NCFE

1.

Rob gets to the tram station at the time below.



What time does he get to the tram station?

**[1 mark]**

2.

Evie opens the shop at seven o'clock.

Which clock shows seven o'clock?

**Tick (✓) your answer.**

**[1 mark]**



**A ( )**



**B ( )**



**C ( )**



**D ( )**


3.

Dylan arrives at the stables at eight o'clock.

Which clock shows when he arrives at the stables?

Tick (✓) your answer.


[1 mark]




A ( )



B ( )



C ( )



D ( )


**Calculator Questions**

Edexcel

1.

Lela works in a restaurant.

The clock shows the time Lela starts work.



**What is the time on the clock?**

**(1)**

Show your answer in the box below.

\_\_\_\_\_ o'clock

2.

- The clock shows the time a yoga class starts.



Rita says the yoga class starts at one o'clock.

**Is Rita correct?**

**Show why you think this.**

(2)

Show your answer here.

Tick (✓) the correct answer.

Yes ( ) No ( )

NCFE

3.

Alex starts his lunch break at one o'clock in the afternoon.

Which clock shows one o'clock?

Tick (✓) your answer.

[1 mark]



A ( )



B ( )



C ( )



D ( )

4.

The clock shows the time Elisha arrives at the museum.



What time does the clock show?

[1 mark]

5.

The delivery arrives at the shop at nine o'clock in the morning.

Which clock shows nine o'clock?

Tick (✓) your answer.

[1 mark]



A ( )



B ( )




C ( )



D ( )

6.

The clock shows the time that Penny delivers the computer.



What time does the clock show?

[1 mark]

7.

Rosie and her mum receive parcels in the post.

Rosie looks at the clock when the parcels arrive.



What time do the parcels arrive?

**[1 mark]**


8.

Rosie starts school at nine o'clock.


Which clock shows nine o'clock?

Tick (✓) your answer.

[1 mark]




A ( )



B ( )



C ( )



D ( )



City & Guilds

9.

A man wants to order a cake before the bakery closes.  
The bakery closes at 5 o'clock.

The man checks the time on his watch.



Is the bakery open now?  
**Give a reason for your answer.**

Yes/No.....

Reason .....

**2 marks**

10.

A woman wants to order cupcakes for all the people in her office.  
There are 18 people.

The bakery sells cupcakes in these boxes.



a

How many boxes of cupcakes does she need to order?  
**Give a reason for your answer.**

Number of boxes .....

Reason .....

**2 marks**

She tells the baker she will pick up the cakes at 1 o'clock.



A



B



C



D

b

Which of these clocks shows the time she will pick up the cakes?  
**Tick one.**

**1 mark**

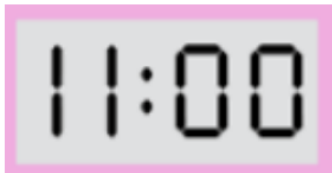
11.

A man visits a craft shop.

This is the sign on the door.



The man checks the time on his watch.



Is the shop open now?  
**Give a reason for your answer.**

Yes/No.....

Reason .....

.....

.....

**2 marks**

12.

What time does the clock show?



.....

**1 mark**

13.

The chef asks the waiter to set the table at 6 o'clock.

The waiter checks his watch.



Should he start setting the table now?  
Give a reason for your answer.

**Yes/No** .....

**Reason**.....  
.....

**2 marks**

14.

The party will start at 3 o'clock.



**A**



**B**



**C**




**D**

Which of these clocks shows the time the party will start?  
**Tick one.**

**1 mark**

15.

A man wants to catch the next bus from the bus station.  
This is the bus timetable

	<b>Number 7 bus times</b> Bus station 3 o'clock Bus station 5 o'clock Bus station 7 o'clock Bus station 9 o'clock
---	---

The man checks the time on his clock.



What is the time of the **next** bus the man can catch?  
**Give a reason for your answer.**

**Reason** .....

.....

.....





**2 marks**

Open Awards

16.

(1 mark)

Tick the clock that shows **7 o'clock**.

 <input data-bbox="699 797 746 853" type="checkbox"/>	 <input data-bbox="1278 797 1326 853" type="checkbox"/>
 <input data-bbox="699 1178 746 1234" type="checkbox"/>	 <input data-bbox="1278 1178 1326 1234" type="checkbox"/>