

**Non-calculator Questions**

NCFE

1.

Dylan goes to the stables.

He goes two days after Monday.

On which day does Dylan go to the stables?

**[1 mark]**

City & Guilds

2.

Write these months of the year in order.  
Start with **May**.

<b>May</b>	<b>November</b>	<b>September</b>	<b>August</b>
------------	-----------------	------------------	---------------

<div style="background-color: #e6f2ff; border: 1px solid #ccc; height: 20px; width: 100%;"></div> <hr style="border-top: 1px dotted #000;"/>	<div style="background-color: #e6f2ff; border: 1px solid #ccc; height: 20px; width: 100%;"></div> <hr style="border-top: 1px dotted #000;"/>	<div style="background-color: #e6f2ff; border: 1px solid #ccc; height: 20px; width: 100%;"></div> <hr style="border-top: 1px dotted #000;"/>	<div style="background-color: #e6f2ff; border: 1px solid #ccc; height: 20px; width: 100%;"></div> <hr style="border-top: 1px dotted #000;"/>
--	--	--	--

**1 mark**

3.

How many months are there in one year?

..... months

**1 mark**

4.

How many days are there in one week?

..... days

**1 mark**

**Calculator Questions**

Edexcel

1.

Lela has these packs of flour in January.

She uses them in the order of the month on the label.

**Which pack will she use first?**

(1)

Tick (✓) the correct pack.

June

( )

March

( )

September

( )

April

( )

2.

Rita has posters of classes in different seasons.


Rita uses the posters in the order of the seasons.

She uses the first poster in the spring.

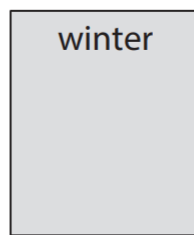
**Which poster will Rita use next?**

(1)

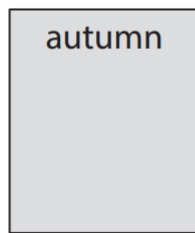
Tick (✓) the correct poster.



( )



( )



( )



( )

NCFE

3.

Rob asks the man in the shop about hiring a moped.

The man says that they are fully booked for the two months that are missing below.

Write the missing months in the table.

[2 marks]

**Months of the year**


January
February
March
April
June
August
September
October
November
December

4.

Alex works every day from Wednesday to Friday.

What is the missing day?

[1 mark]



5.

Elisha visits the museum in May.

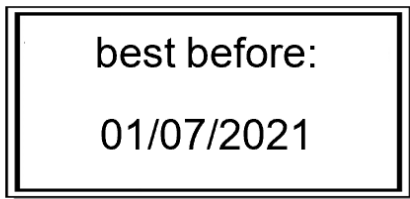
She will visit again in three months.

In which month will Elisha visit the museum again?

[1 mark]

6.

Evie checks the date on a tin of beans.



What is the name of the 7th month in a year?

[1 mark]

7.

Evie gets a delivery on Thursday.

The last delivery was three days before Thursday.

On what day was the last delivery?

[1 mark]

8.

Fez buys a game in summer.

He will buy a new game in the season after summer.

In which season will Fez buy the new game?

**[1 mark]**

9.

Fez and his friends play on Friday.

They play again two days later.

On what day do they play again?

**[1 mark]**



10.

Fez buys the computer in August.

The shop will deliver the computer in the month after August.

In which month will the shop deliver the computer?

**[1 mark]**

11.

Rosie and her mum order the items on Wednesday.

They will arrive in two days.

Rosie thinks the items will arrive on Thursday.

Is she correct?

Give a reason for your answer.


**[2 marks]**

12.

Rosie draws a poster showing all of the seasons in a year.

How many seasons are on the poster?

[1 mark]



13.

The stables are only open in spring, summer and autumn.

In which season are the stables closed?

[1 mark]



City & Guilds

14.

Write these months in the correct order.  
Start with **June**


**June**

**December**

**October**

**August**

**July**



1 mark

15.

The shop assistant tells the man the craft shop does not open on Sunday.

How many days of the week is the shop open?

days

**1 mark**